



CLASS: LOWERKG

WORKSHEET: II

DATE: 23.04.2020




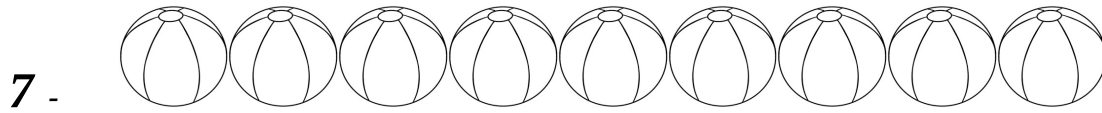
SUBJECT: MATHEMATICS

TIME LIMIT:30MINS

I. FILL IN THE MISSING NUMBERS:

26 _____ 28 _____ 30 _____ 33
_____ 35 _____ 38 _____ 40 _____ 42
_____ _____ 45 _____ _____ 48 _____ 50

II. COUNT AND COLOUR:



Note for parents -

Please take a printout

or

Copy the worksheet along with the drawings (if any) using a pencil on a sheet of paper and then let your child solve it under your supervision. Keep the work sheet ready in a file to be submitted on the opening day.