

Class: U.K.G.

Subject: Mathematics.

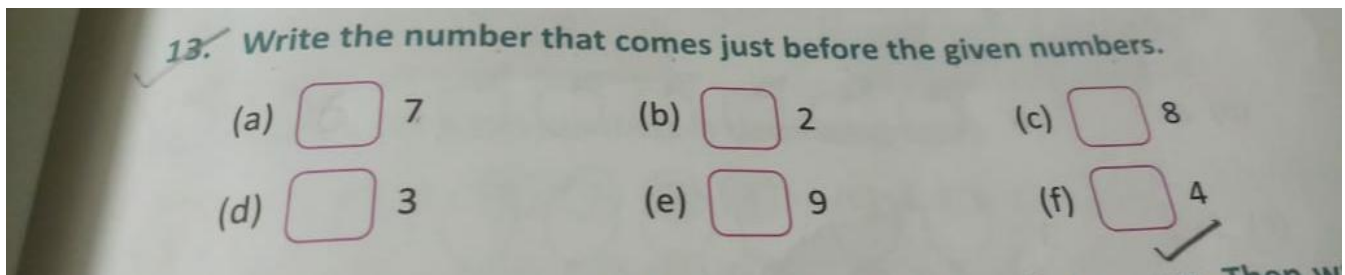
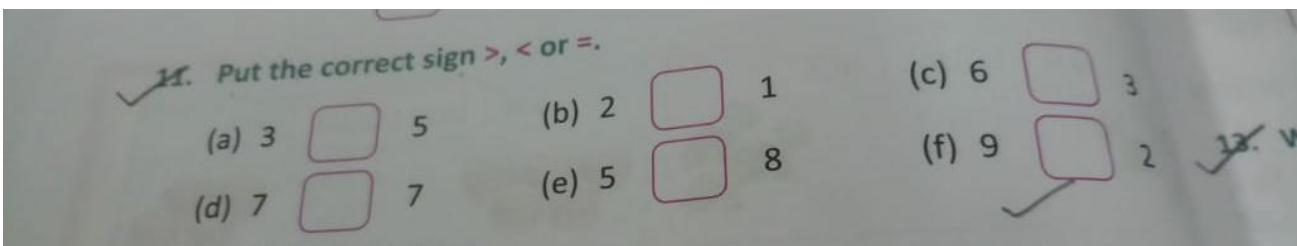
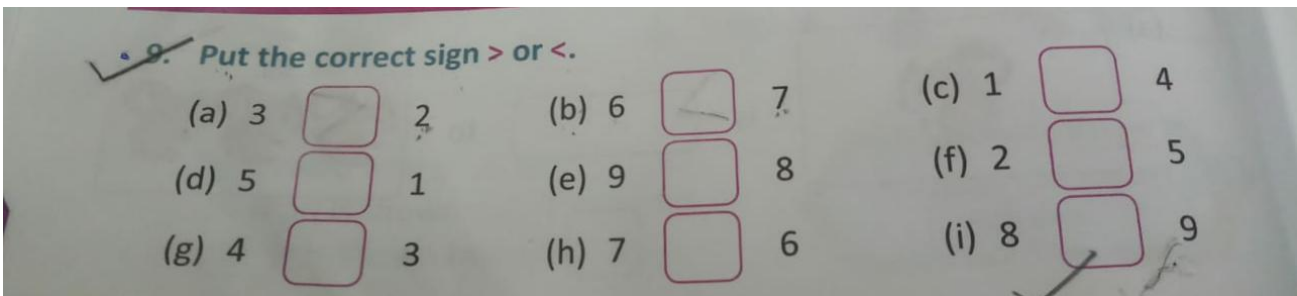
Worksheet: 31

Date: 03-09-20.

Time limit: 30 minutes

Book: **ICSE Mathematics 1**

Solve question number 9 from page number 12, question number 11 from page number 14, question number 13 from page number 15, question number 15 from page number 16, question number 1 from page number 18, question number 4 from page 19 and page number 20 in your mathematics book.



15. Write the number that comes just after the given numbers.

(a) 2

(b) 5

(c) 8

(d) 6

(e) 4

(f) 3



Test Yourself

1. Write the number names for the given numbers.

(a) 3

(b) 7

(c) 5

(d) 8

4. Put the correct sign $>$, $<$ or $=$.

(a) 1 5

(b) 4 3

(c) 6 9

(d) 2 2


✓ Write the number that comes before, after or in between the given numbers.

- (a) 6 (b) 3 (c) 7
(d) 4 6 (e) 2 4 (f) 8
(g) 1 (h) 9 (i) 5 7 ✓



Fun Time

Join the dots from 1 to 9 to complete the pictures and colour them.



Click on the link for video: https://youtu.be/UHNO2_skXTs

Note for parents:

Please guide your child in his/her work