



REVISION

CLASS: LOWER KG

WORKSHEET: 38

DATE: 30.09.2020

SUBJECT: MATHEMATICS

I. Fill in the missing numbers

1 8

2 1

2 3

2 4

2 6

2 9

3 1

3 3


II. Draw as many as

2 -

4 -

3 -

III. Count and ring



7

8

9



10

11

12

IV. Ring the smaller number

3

7

10

15

V. Addition (+)


3

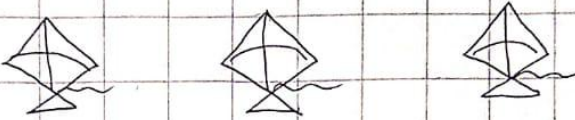
2

+ 3

+ 0

VI. Count and colour

4 - 

2 - 

VII. Matching

T h r e e

14

T w e l v e

3

F o u r t e e n

12

Note for Parents:-

Copy the worksheet as shown in question no. **I, II, III, IV, V, VI** and **VII** along with the drawings (if any) using a pencil in a **check lined notebook** and then let your child solve it under your supervision.