



CLASS: LOWER KG

WORKSHEET: 35

DATE: 22.09.2020

SUBJECT: MATHEMATICS


TIME LIMIT: 30MINS

**I. COMPLETE THE SERIES:**

Complete the series				
17	18			22
23				28
36				41
45				50

## II. COUNT AND MATCH:

Count and match



10



8




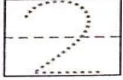


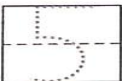
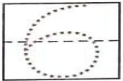
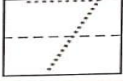
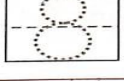
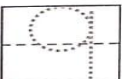
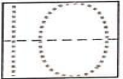


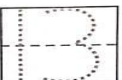
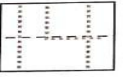

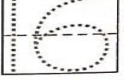
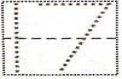
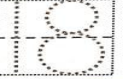
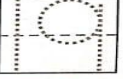
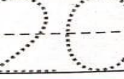
7



12

**III. TRACE AND REVISE NUMBERS AND NUMBER NAMES (1 TO 20) (Learning Link Maths Book - level B) IN PAGE NO - 60:**

Let us trace and revise numbers and number names: 1 to 20.

 one	 two	 three	 four
 five	 six	 seven	 eight
 nine	 ten	 eleven	 twelve
 thirteen	 fourteen	 fifteen	 sixteen
 seventeen	 eighteen	 nineteen	 twenty

**60** **Note to teacher:**  
Let children trace and write the numbers and number names.

**PLEASE CLICK ON THE LINK FOR THE VIDEO:**

[https://youtu.be/TE5S\\_92dJJs](https://youtu.be/TE5S_92dJJs)

**Note for Parents:-**

Copy the worksheet as shown in question no. **I and II** along with the drawings (if any) using a pencil in a **check lined notebook** and then let your child solve it under your supervision and also assist your child to do question no. **III** using a pencil in the book mentioned above with the date at the top of the page